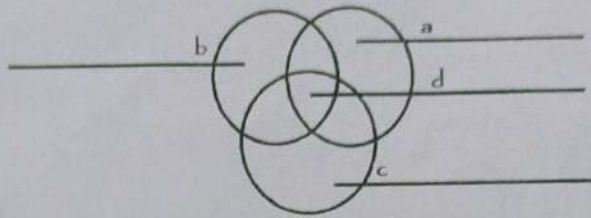



Q.3. Look at the diagrammatical representation and fill the corresponding domains of the earth:



Q.4. Point out three characteristics of the different types of governments as given below:



TEST PAPER

Q.1. Identify the clues given below, find the correct word and encircle it in the given wordsearch:

- | | |
|---|--|
| (a) Other name of the slaves. | (f) He defeated Ibrahim Lodhi in Panipat. |
| (b) Land controlled by military commanders. | (g) Mongol invader. |
| (c) Son-in-law of Qutub-ud-din-Aibak. | (h) He introduced copper and silver coins. |
| (d) First women ruler of medieval India. | (i) Pargana was headed by this official. |
| (e) Traveller in the court of Muhammad-bin-Tughlaq. | (j) Land owners in Delhi Sultanate. |

C	M	U	H	A	M	M	A	D	T	U	G	H	L	A	Q	X
H	Z	X	V	F	I	L	R	R	J	R	S	A	G	Y	M	N
A	D	H	B	U	K	T	G	A	E	P	M	B	B	D	R	I
N	V	T	F	D	H	D	V	J	E	R	T	Y	A	S	X	K
G	V	I	L	T	U	T	M	I	S	H	H	J	B	D	H	K
E	N	G	G	H	T	L	G	A	M	I	L	H	U	C	J	K
Z	G	T	T	E	S	K	B	S	H	J	K	M	R	V	J	Y
K	I	B	N	B	A	T	T	U	T	A	V	N	J	N	V	H
H	D	D	S	T	H	J	I	L	Y	Y	Y	G	F	H	D	P
A	C	U	W	R	G	I	Q	T	A	S	H	U	N	Y	R	K
N	A	I	E	E	H	Y	D	A	T	U	E	D	G	R	W	L
L	X	T	Q	D	T	E	D	N	G	J	P	I	T	S	I	K
J	C	G	T	G	N	H	U	A	K	I	M	A	M	L	U	K

NAME _____
CLASS - VII

PSM WORLD SCHOOL
HOLIDAY HOMEWORK
SUBJECT = S.S.T

17

Choose the correct options!:-

- The Delhi Sultanate was established by:
(a) Tughlaqs (b) Turks
(c) Lodhis (d) Khaljis
- The first Europeans to arrive as traders in India during medieval period were the
(a) British (b) French
(c) Dutch (d) Portuguese
- Minhaj-us-Siraj used the term _____ for areas of Punjab, Haryana and the land between Ganga and Yamuna:
(a) Bharata (b) Aryavarta
(c) Hindustan (d) Sindhu
- Akbarnama* and *Ain-i-Akbari* were written by:
(a) Humayun (b) Ziauddin Barni
(c) Kalhana (d) Abul Fazal
- Tripartite struggle was the struggle for the control of Kanauj among the three dynasties, namely:
(a) Hunas, Scythians and Aryans (b) Palas, Pratiharas and Rashtrakutas
(c) Gujjars, Chauhans and Chalukyas (d) Gujjars, Pratiharas and Palas
- Ur* was the name given to the assembly of _____ during the Pallava rule.
(a) merchants (b) craftsmen
(c) non-brahman landowners (d) peasants.

Q.2. Fill in the blanks:

- All the water bodies together form the _____
- The _____ contains all forms of life.
- _____ is the gaseous layer that surrounds the earth.
- _____ is found in solid, liquid and gases forms.
- World Water Day* is celebrated on _____
- Hard outermost solid layer of earth made up of rock material is called _____
- Atmosphere* is held around the earth by its _____
- Study of relationships between living organism and their surroundings is called _____
- Living world where land, water and air interact with each other to support life is _____
- Oikos* is the Greek word meaning _____

- If two lines intersect at a point then the vertically opposite angles are always
- (a) equal (b) unequal
(c) Supplementary (d) Complementary
41. Name the Chinese pilgrim who visited India during the reign of Harsha Vardhana.
- (a) Fa-hsien (b) Megasthenes
(c) Huien Tsang (d) Marco Polo
42. In which ocean did the ship Exxon Valdez spill a huge amount of oil, causing the death of numerous marine animals?
- (a) Arctic Ocean (b) Atlantic Ocean
(c) Pacific Ocean (d) Southern Ocean
43. Which of these is the state animal of Sikkim?
- (a) Reindeer (b) Bear
(c) Yak (d) Red Panda
44. Which Chinese pilgrim visited India during the reign of Chandrayupta II?
- (a) Fa-hsien (b) Marco Polo
(c) Huien Tsang (d) Al-Biruni
45. Who is known as 'the father of Genetics'?
- (a) Louis Pasteur (b) George Mendel
(c) John Dalton (d) Nicolaus Copernicus
46. Which term is used for Rearing of Aquatic organisms?
- (a) Aquaculture (b) Aviculture
(c) Aeroculture (d) Horticulture
47. Which of these is a utility software?
- (a) Window XP (b) MS Word
(c) Norton Antivirus (d) Q Basic
48. ROM stores data _____
- (a) permanently (b) temporarily
(c) partially (d) fully
49. _____ is the set of instructions given to the computer to perform a specific task.
- (a) Monitor (b) Hardware
(c) Software (d) Printer
50. _____ creates a link between a user and computer.
- (a) Device driver (b) Utilities
(c) Operating system (d) Image viewer

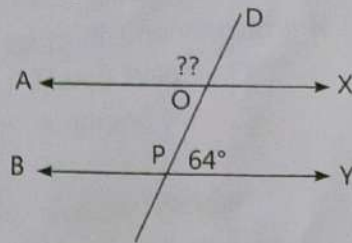
NAME: =

PSM WORLD SCHOOL
HOLIDAY HOMEWORK
SUBJECT = G.K.

(15) CLASS
VII

Choose the correct options 1-

1. Name the instrument that measures electric current.
(a) electrical cell (b) electrical lamp
(c) ammeter (d) electrical switch
2. The value of $(40^\circ - 50^\circ) \times 6^2$ is
(a) 36 (b) -36 (c) 0 (d) 1
3. If the angles of a triangle are in the ratio 1 : 2 : 3, then the triangle is —
(a) acute angled (b) obtuse angled
(c) right angled (d) right angled isosceles
4. Two railway tracks are parallel to each other. A third track intersects both the tracks at O and P as shown in the figure.



- Find the value of the angle (??) shown in the figure.
- (a) 116° (b) 26° (c) 56° (d) 66°
5. The mean of single digit whole numbers is
(a) 4 (b) 5 (c) 4.5 (d) 5.5
 6. Mohit bought a CD player for ₹ 750 and sold at ₹ 900. Find his gain percentage.
(a) 15% (b) 16% (c) 19% (d) 20%
 6. 3 taken away from 0 gives
(a) 3 (b) -3 (c) 0 (d) not possible
 7. One of the angles of a triangle is 100° . Two other angles of the triangle are equal. What is the measurement of equal angle?
(a) 45° (b) 40° (c) 60° (d) 55°
 8. If there are 14400 people born in a day then how many people were born every hour?
(a) 240 (b) 120 (c) 600 (d) 400
 9. Perimeter of a square park is 520 m. The area of the park is
(a) 19600 m^2 (b) 169 m^2 (c) 196 m^2 (d) 16900 m^2

C) Use the possessive noun in sentences of your own.

(14)

1. The thieves' plan

2. The birds' feathers

3. The elephant's tusks

4. The Principal's office

5. Sharukh Khan's next movie

6. The internet's connectivity

D) Add suitable question tags to the following sentences.

1. Happier people live longer, _____?

2. The mouse was caught in the trap, _____?

3. Mrs. Anu seems to be a crazy woman, _____?

4. This Diwali, there was much less pollution, _____?

5. The moneylender slipped on the banana peel, _____?

E) Pick out the nouns or pronouns in the objective case.

1. He hit Mukul.

2. She saw him park his car.

3. The book lay under the table.

4. Neera waited for him in the corridor.

5. The crane was called to lift the monkey out of the well.

F) State two adjectives each from the degrees of comparison and use them in sentences of your own.

G) Make adjectives from the given nouns using suitable suffixes

Beauty _____

courage _____

Comfort _____

skin _____

Rigour _____

ease _____

NAME: _____

PSM WORLD SCHOOL
SUMMER VACATION
HOLIDAY HOMEWORK
SUBJECT = ENGLISH
CLASS = VII

13

A. Fill in the blanks using the correct form of the verbs given in the brackets.

1. Reshma _____ khoya burfi. (enjoy/enjoys)
2. The hyenas often _____ in groups. (hunt/hunts)
3. Everyone _____ going to question me. (is/are)
4. There _____ the list of invitees I was looking for. (is/are)
5. He saw two eyes _____ at him from behind the bush. (stare/stares)
6. Nitin and Riya _____ attended the same school as me. (has/have)
7. The children _____ around whenever their mother is away. (jump/jumps)
8. Thick clouds of dust _____ as the camels _____ through the desert. (rise, race/rises, races)

B. Add suitable predicates to the following sentences.

1. I wish I had...

2. We all need...

3. The next vacations...

4. Examination time is...

5. This weekend I might...

6. The wolves of the wild...

7. If I were a king for a day...

8. In the middle of the road...

9. There were three kittens...

10. My parents are really proud of the...

Q(10) Draw a pitcher plant and describe its modifications to traps insects.

Q(11) Write the word equation for photosynthesis?

Q(12) Define nutrition.

Q(13) Collect all type of fabrics thread, and make a short analysis of A4 sheet? And paste it too?

Q(14) What is fibres? Give some example of it?

→

Q(1) Where is water from undigested food absorbed in the body?

Q(2) Where is digested food absorbed in the body?

Q(3) Name the type of teeth which are for
Chewing and grinding food _____

Piercing and tearing food _____

Biting and cutting food _____

Q(4) Name the parts of Amoeba which help it in moving and capturing food.

Q(5) State whether the following statements are true or false.

(i) The tongue helps in mixing saliva with food. ()

(ii) Digestion of starch starts in stomach. ()

(iii) Amino acids provide energy to our body. ()

(iv) The blood takes digested food to all the cells of the body. ()

Q(6) Which organ in the cow's digestive system differentiate it from that of human beings?

Q(7) Differentiate between the following:

(i) Autotrophs and Heterotrophs.

(ii) Parasites and Saprophytes

(iii) Total and Partial Parasites.

Q(8) What are the functions of stomata?

Q(9) What is cell membrane, cytoplasm, nucleus?
→ Draw a Diagram and Label them.

- (2) _____ Can be either horizontal or vertical lines.
- (3) _____ shows the meaning of symbol and colours used in a chart.
- (4) The _____ chart usually displays the data in the form of vertical bars.
- (5) _____ chart shows only one data series at a time.
- (10) Make an Excel sheet with the Help of Internet.
[on. Report card :- Topic].

(1) Put (✓) on the correct option.

(i) Decimal number system consists of 10 digits from _____.

- (a) 1 to 10 () (b) 0 to 9 () (c) 11 to 20 () (d) 21 to 30 ()

(ii) Binary number system has a base of _____.

- (a) 8 () (b) 16 () (c) 2 () (d) 10 ()

(iii) In MS Excel, _____ cell referencing uses a \$ sign.

- (a) Absolute

(2) Write the full forms of the following:

(1) MSD:-

(2) LSD:-

(3) Match the following :-

(i) Binary number system

a. base 16

(ii) Octal number system

b. base 2

(iii) Decimal number system

c. base 8

(iv) Hexadecimal number system

d. base 10

(4) What is a number system?

(5) Which number system is used by computers?

(6) Convert the last ~~five~~ four digits of your parents' mobile number into binary number.

(7) Define charts in Excel.


(8) Fill in the blanks using the hints given below:

Hints: Guideline, chart, Legend, Column, Pie, Scatter

9.) _____ is used to draw comparison and analyse the growth and trends among the values in a table.

Q(10) Which of the following drawing shows $2 \times \frac{1}{3}$:-

2



Q(11) In addition and subtraction of two integers, sign of the answer depends upon?

Q(12) Sum of two negative number is always?

Q(13) Sum of two positive number is always?

Q(14) Sum of -36 and 29 is _____.

Q(15) Which of the following statement is false?

(a) $-7 + (-6) = -13$

(c) $2 + (-1) = 1$

(b) $-5 + 1 = 4$

(d) $8 + (-9) = -1$

Q(16) What will be the additive inverse of -5 ?

Q(17) Predecessor and Successor of -9 is?

Q(18) The value of $\Rightarrow 6 - (-3) = ?$

Q(19) $-7 - (\underline{\quad}) = 2$

Q(20) Multiplication of 3 and -4 ?

Class = VIIth (Math's)

(7)

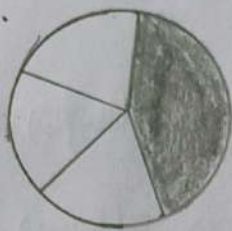
(1) Which of the following fraction has numerator 5.

- (a) $\frac{2}{5}$ (b) $\frac{5}{7}$ (c) $1\frac{5}{7}$ (d) $7\frac{1}{5}$

(2) Which of the following fraction has denominator 8.

- (a) $\frac{8}{7}$ (b) $1\frac{3}{8}$ (c) $1\frac{8}{7}$ (d) $\frac{3}{8}$

(3) What fraction does the shaded position in the adjoining fig. represents.



- (a) $\frac{5}{2}$ (b) $\frac{3}{5}$ (c) $\frac{2}{5}$ (d) $\frac{5}{3}$

(4) Which one of the following is proper fraction?

- (a) $\frac{7}{5}$ (b) $\frac{3}{2}$ (c) $\frac{4}{7}$ (d) $\frac{4}{3}$

(5) What is the value of $\frac{2}{7} + \frac{3}{7} = ?$

- (a) $\frac{5}{14}$ (b) $\frac{5}{7}$ (c) $\frac{6}{7}$ (d) $\frac{35}{14}$

(6) What is the value of $\frac{5}{8} - \frac{3}{8} = ?$

- (i) $\frac{37}{16}$ (ii) $\frac{1}{8}$ (iii) $\frac{2}{8}$ (iv) $\frac{43}{8}$

(7) Which one of the following is greater.

- (a) 5.0 (b) 0.5 (c) 0.005 (d) 0.05

(8) The product of $\frac{2}{5} \times 5\frac{1}{4} = ?$

(9) The reciprocal of $1\frac{2}{3}$ is = ?

प्र० 6 निम्न शब्दों के पर्यायवाची रूप लिखिए -

- (i) माँ - _____
- (ii) पुत्री - _____
- (iii) मित्र - _____
- (iv) रात - _____
- (v) व्यथा - _____

प्र० 7 निम्नलिखित शब्दों के दो-दो अर्थ लिखो -

- (i) अंग - _____
- (ii) अंबर - _____
- (iii) आरंग - _____
- (iv) शून्य - _____
- (v) तात - _____

प्र० 8 रिक्त स्थानों में कोष्ठक में दिए गए शब्दों से बनी हुई भाववाचक संज्ञाएं भरिए।

- (क) अटल जी का _____ किसे प्रभावित नहीं करता (व्यक्ति)
- (ख) मैं लड़के का _____ देखकर हँस पड़ा। (लड़का)
- (ग) दाना चुगकर पक्षी ने लंबी _____ भरने का निश्चय किया। (उड़ना)
- (घ) वे जान गए थे कि _____ में बल होता है। (स्क)

प्र० 9 संज्ञा किसे कहते हैं? यह कितने प्रकार की होती हैं?

उत्तर =

प्र० 10 निम्न मुहावरों का वाक्य में प्रयोग कीजिए -

- 1) आकाश पाताल स्क करना - _____
- 2) कान मरना - _____
- 3) खून पसीना स्क करना - _____
- 4) टैदी खीर टौना - _____